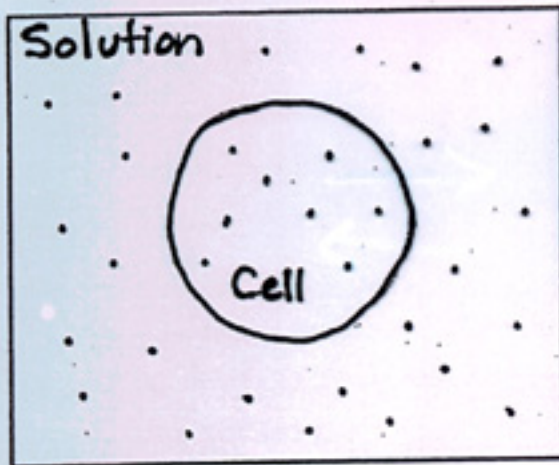


The movement of water in biological systems:



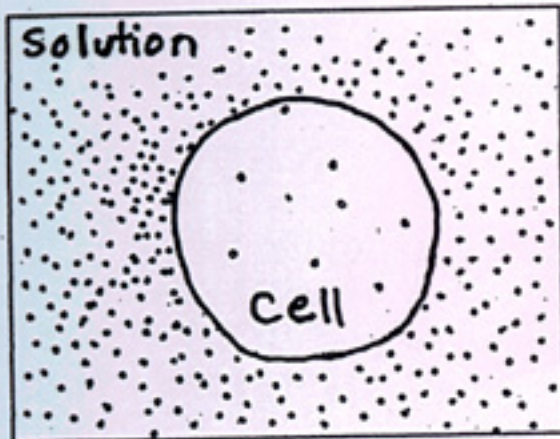
The cell and the solution are _____.

What does this mean?

Equilibrium

Draw arrows to show the direction of water movement.

How will the appearance of the cell change? _____



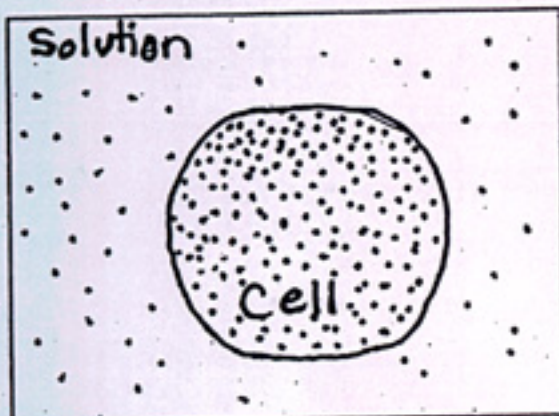
The cell is _____ to the solution.

The solution is _____ to the cell.

What does this mean?

Draw arrows to show the direction of water movement.

How will the appearance of the cell change?



The cell is _____ to the solution.

The solution is _____ to the cell.

What does this mean?

Draw arrows to show the direction of water movement.

How will the appearance of the cell change?